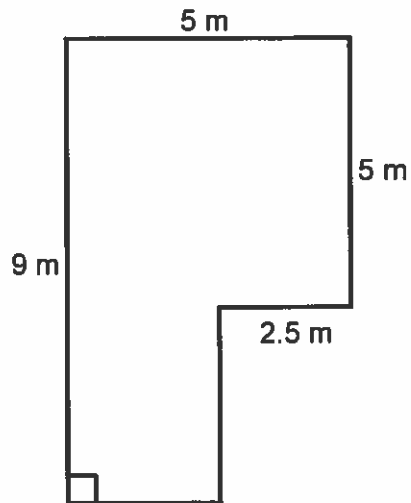


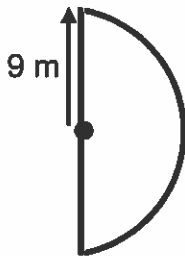
Multiple ChoiceRough Work

- 1 Determine the perimeter of the following object.



- a 28 m
- b 21.5 m
- c 14 m
- d 26.5 m

- 2 Which is closest to the perimeter of the following object.



- a 56 m
- b 28 m
- c 37 m
- d 46 m

Fill in only one circle for each question.

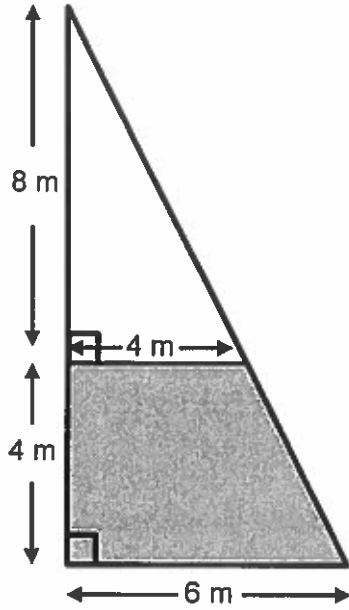
- 1 (a) (b) (c) (d)

- 2 (a) (b) (c) (d)

Show your work.

3. Sail

A sail for a sailboat is represented below.



The unshaded part of the sail is made with material that costs $\$32/\text{m}^2$.
The shaded part of the sail is made with material that costs $\$125/\text{m}^2$.

Determine the total cost of the sail.

Show your work.