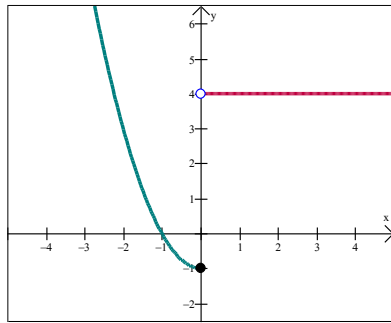
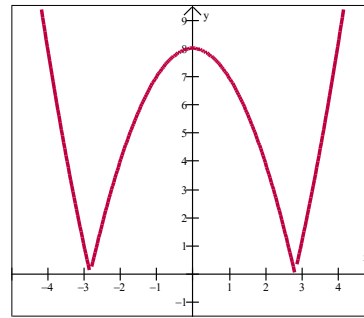


**WARM UP** State the domain and range for the following functions.

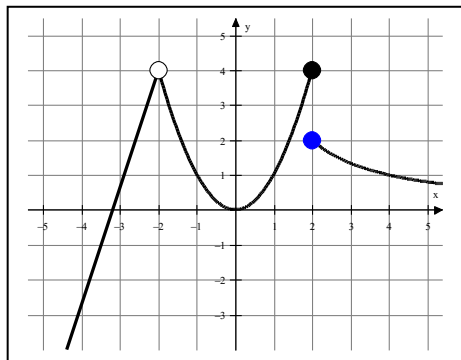
1.



2.



3.



4.  $3x - 5y = 12$

5.  $y = -3x^2 + 5$

6.  $y = \sqrt{x}$

7.  $y = \sqrt{x-3}$

8.  $y = \sqrt{x+1}$