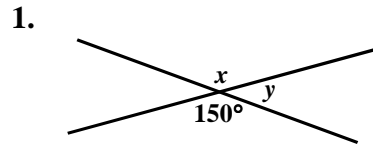
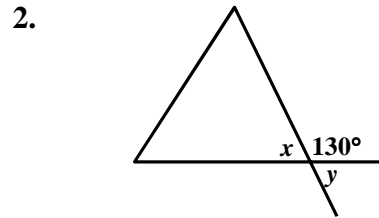


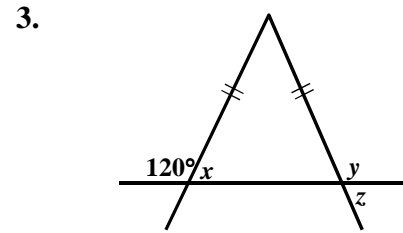
MPM 1DI - Applying the Angle Theorems



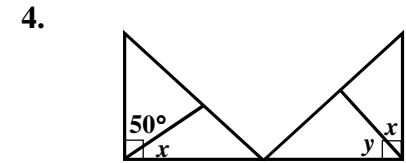
$x =$ _____
 $y =$ _____



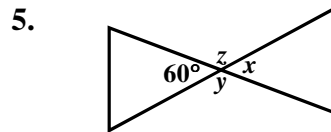
$x =$ _____
 $y =$ _____



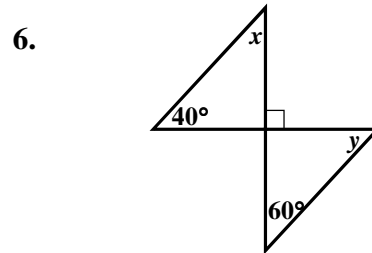
$x =$ _____
 $y =$ _____
 $z =$ _____



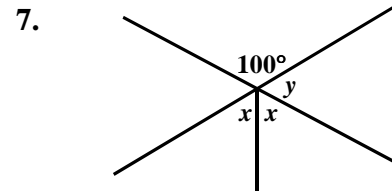
$x =$ _____
 $y =$ _____



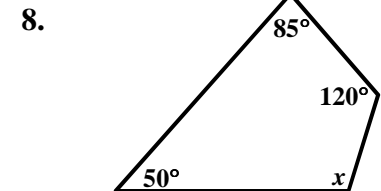
$x =$ _____
 $y =$ _____
 $z =$ _____



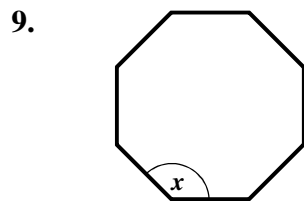
$x =$ _____
 $y =$ _____



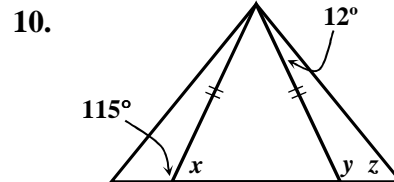
$x =$ _____
 $y =$ _____



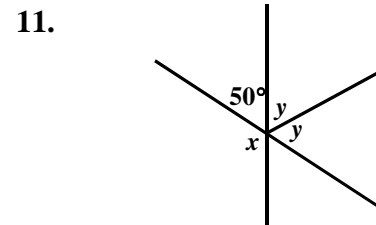
$x =$ _____



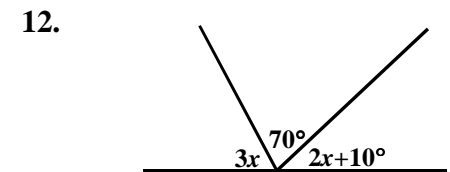
$x =$ _____



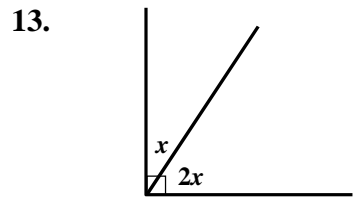
$x =$ _____
 $y =$ _____
 $z =$ _____



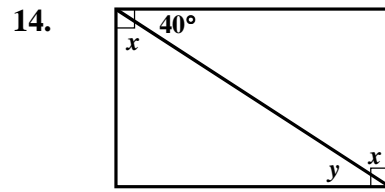
$x =$ _____
 $y =$ _____



$x =$ _____

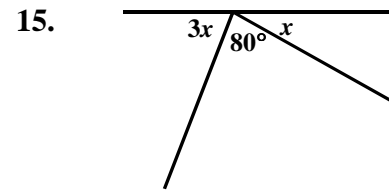


$x =$ _____

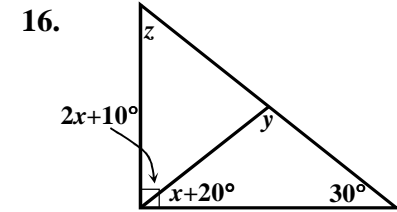


$x =$ _____

$y =$ _____



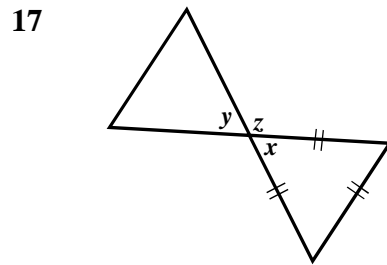
$x =$ _____



$x =$ _____

$y =$ _____

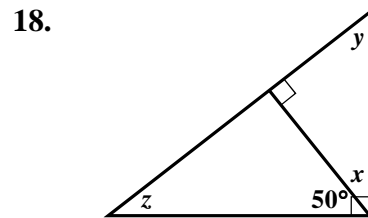
$z =$ _____



$x =$ _____

$y =$ _____

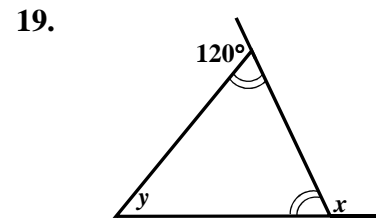
$z =$ _____



$x =$ _____

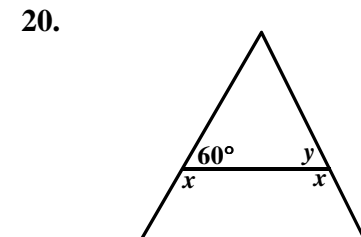
$y =$ _____

$z =$ _____



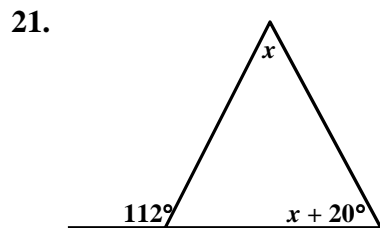
$x =$ _____

$y =$ _____

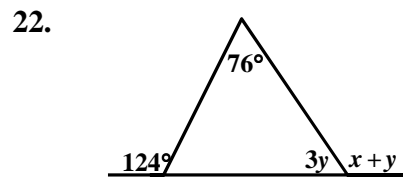


$x =$ _____

$y =$ _____

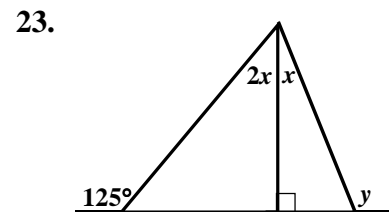


$x =$ _____



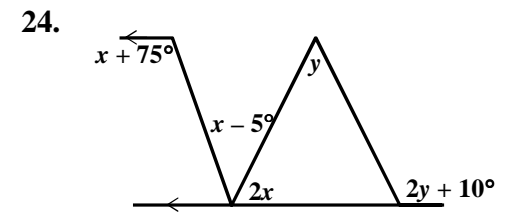
$x =$ _____

$y =$ _____



$x =$ _____

$y =$ _____



$x =$ _____

$y =$ _____